



A metade ($\times \frac{1}{2}$)

- Pinta metade dos elementos em cada figura e completa. Observa o exemplo.




$$\frac{1}{2} \times 6 = 3$$

Então metade de 6 é 3.



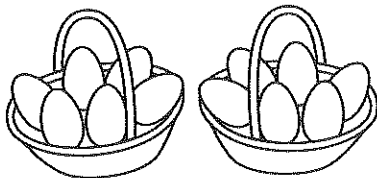
$$\frac{1}{2} \times 10 = \underline{\hspace{2cm}}$$

Então metade de 10 é .



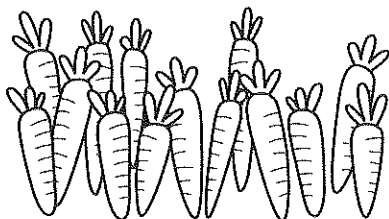
$$\frac{1}{2} \times 8 = \underline{\hspace{2cm}}$$

Então metade de 8 é .



$$\frac{1}{2} \times 12 = \underline{\hspace{2cm}}$$

Então metade de 12 é .



$$\frac{1}{2} \times 14 = \underline{\hspace{2cm}}$$

Então metade de 14 é .



$$\frac{1}{2} \times 4 = \underline{\hspace{2cm}}$$

Então metade de 4 é .