

Nome: _____

Data: _____

1. Completa.

$2 + \square = \square$



$\square + \square = \square$

2. Pinta as pétalas da mesma cor do centro das flores que representam a mesma quantidade.








$3 + 0$ $1 + 0 + 1$ $2 + 2$
 $1 + 1$
 $2 + 2 + 1$ $3 + 2$
 $3 + 1$ $1 + 2$
 $2 + 1$ $2 + 0$ $1 + 2 + 1$ $4 + 1$
 2 3 4 5

● Liga cada pétala ao centro da sua flor.

3. Completa o quadro conforme o exemplo.

| | | | | | |
|-------------|---|---|--|---|---|
| |  |  |  |  |  |
| $2 + 2 + 1$ | | | | | |
| $2 + 1 + 1$ | | | | | |
| $1 + 1 + 1$ | | | | 3 | |
| 1 | | | | | |
| $1 + 1$ | | | | | |

4. Completa.


| | | | | | | |
|--|--|--|--|---|--|--|
|  |  |  |  |  |  |  |
| 5 | = | $4 + \underline{\quad}$ | = | $\underline{\quad} + 2$ | = | $1 + \underline{\quad}$ |

| | | |
|---|----------|-----------------------------|
| $4 + \underline{\quad}$ | 5 | $1 + \underline{\quad} + 1$ |
| $3 + \underline{\quad}$ | | $2 + 1 + \underline{\quad}$ |
| $2 + \underline{\quad}$ | | $1 + \underline{\quad}$ |
| $\underline{\quad} + \underline{\quad} + 3$ | | |

5. Estavam 2 pássaros num fio de um poste de electricidade.

Chegaram mais 3.

Quantos pássaros estão agora no fio?



○ =



Resposta: Agora estão pássaros no fio.