



## Quantas vezes aparecem os elementos?

- Escreve, em cada caso, quantas vezes é que cada elemento aparece. Observa o exemplo e completa.




$1 + 1 + 1$

$3 \times 1$




$1 + 1 + 1 + 1 + 1$

$\text{---} \times \text{---}$




$\text{---} + \text{---} + \text{---} + \text{---}$

$\text{---} \times \text{---}$




$\text{---} + \text{---}$

$\text{---} \times \text{---}$



$\text{---} + \text{---} + \text{---} + \text{---} + \text{---} + \text{---} + \text{---} + \text{---}$

$\text{---} \times \text{---}$



$\text{---} + \text{---} + \text{---} + \text{---} + \text{---} + \text{---}$

$\text{---} \times \text{---}$