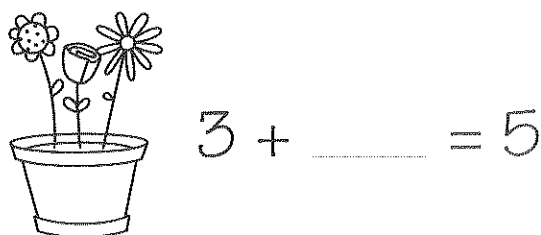
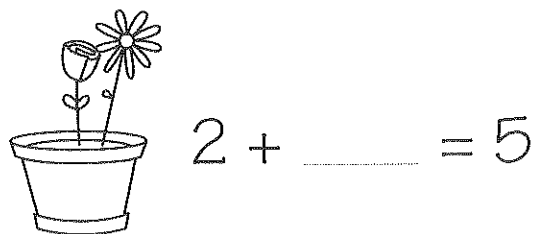






Até 5

- Desenha, em cada caso, o número de flores necessário para que cada vaso fique com 5 flores. Escreve-o em linguagem matemática. Observa o exemplo.



- Segue as setas e cobre os algarismos.

