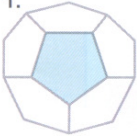


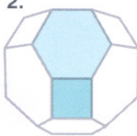
Faces Poligonais

Observa os seguintes poliedros. Diz qual o nome do polígono da face que está pintada e escreve-o no teu caderno.

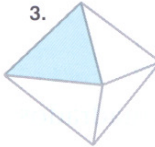
1.




2.



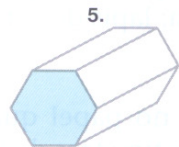
3.



4.



5.



Polígono 1 –

Polígono 2 –

Polígono 3 –

Polígono 4 –

Polígono 5 –