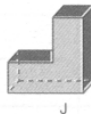


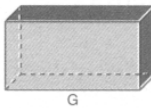

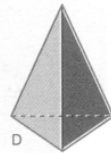
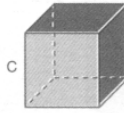
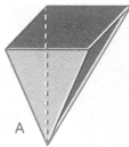


Classificação de sólidos

Copia as seguintes questões para o teu caderno e responde o melhor que puderes!

Bom trabalho!



- 1 – Quais destes sólidos são poliedros?
- 2 – Quais destes sólidos são cilindros?
- 3 – Quais destes sólidos são prismas?
- 4 – Qual o nome dos sólidos assinalados com a letra A, B, D e E?
- 5 – Quais destes sólidos têm 8 vértices?
- 6 – Quais destes sólidos tem 8 faces?
- 7 – Existem dois sólidos com 5 faces. Quais são?