

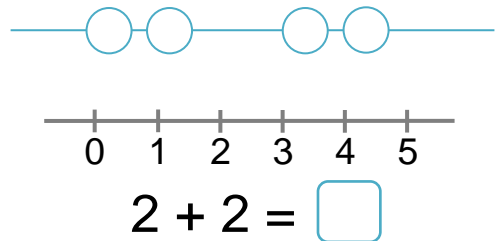
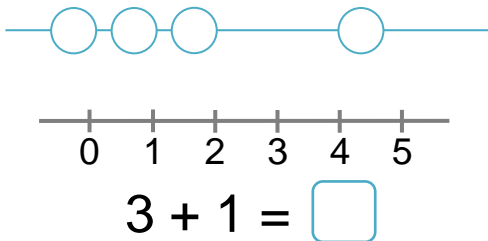
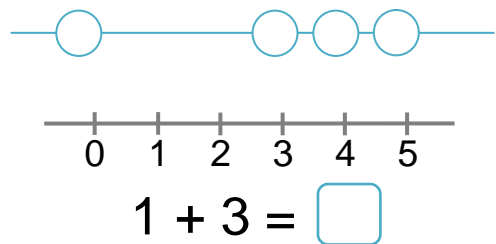
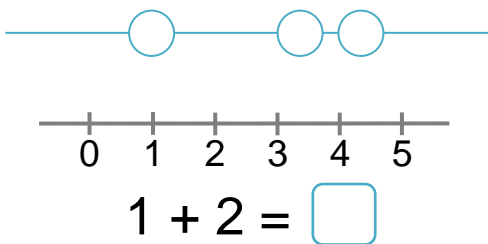
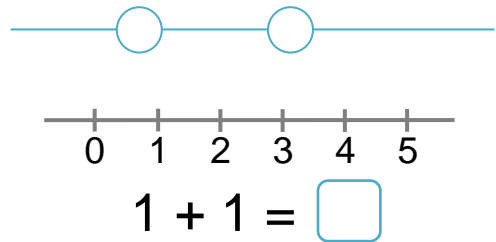
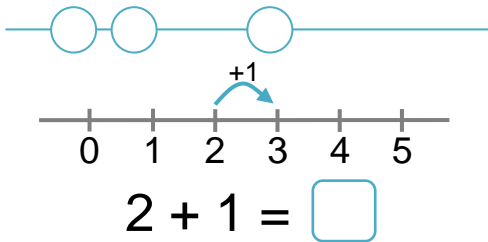
MATEMÁTICA

Nome: _____

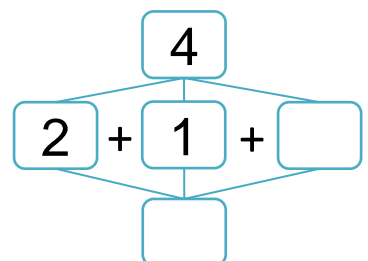
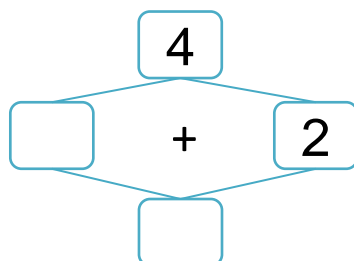
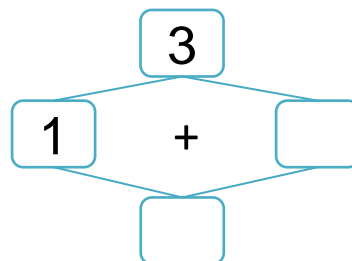
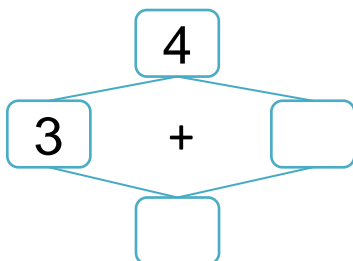
Data: ___/___/___



Observa o exemplo e completa.



Calcula e preenche os esquemas.





O Nuno tem 1 balão amarelo e 2 azuis.
Quantos balões tem o Nuno?

- Completa.

$$\square \circ \square = \square$$



Resposta: O Bruno tem balões.



Observa, completa e responde.

- Quantas flores?



Há flores.

- Desenha mais duas flores. Quantas flores ficaram?



$$\square \circ \square = \square$$

Resposta: Ficaram flores.

- Quantos gorros?



Há gorro.

- Desenha mais um gorro. Quantos gorros ficaram?



$$\square \circ \square = \square$$

Resposta: Ficaram gorros.