

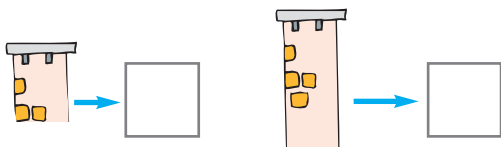


- Conversar sobre a figura (quantas chaminés, janelas, portas e antenas se podem observar).

O que viu o Pai Natal?



- Completar as etiquetas.



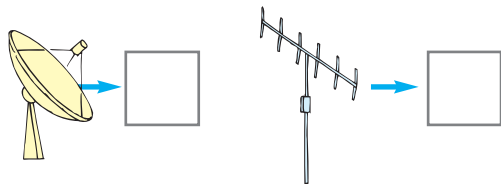
$$\square + \square = \square$$

Viu chaminés.



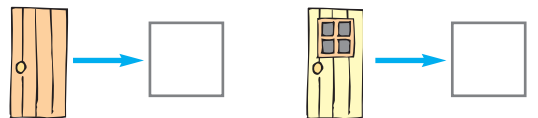
$$\square + \square = \square$$

Viu janelas.



$$\square + \square = \square$$

Viu antenas.



$$\square + \square = \square$$

Viu portas.