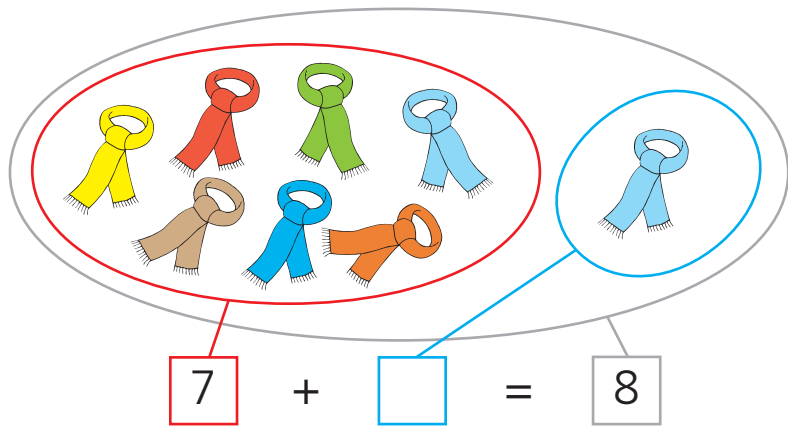


4

Composição e decomposição do número 8

- Conversar sobre os exercícios propostos.
- Completar.



$7 + 1 = \underline{\quad}$

$1 + 7 = \underline{\quad}$

$8 = 1 + \underline{\quad}$

$8 = 7 + \underline{\quad}$

- Completar de acordo com as cores das barras.

$1 + \underline{\quad}$		$\underline{8} + 0$
$\underline{3} + \underline{\quad}$		$\underline{2} + \underline{\quad}$
$\underline{5} + \underline{\quad}$		$\underline{4} + \underline{\quad}$
$\underline{7} + \underline{\quad}$		$\underline{6} + \underline{\quad}$
		$0 + \underline{\quad}$

- Observar o exemplo. Completar de acordo com as cores das barras. Pintar as bolas com as respectivas cores.

$\underline{2} + \underline{6} = 8$	$\underline{\quad} + \underline{\quad} = 8$	$\underline{\quad} + \underline{\quad} = 8$	$\underline{\quad} + \underline{\quad} = 8$



• Completar a tábua. Preencher as tabelas.

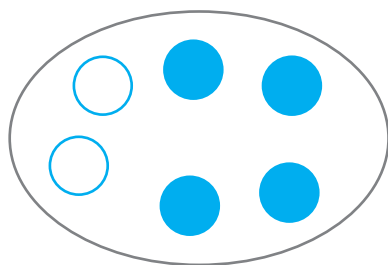
+	1	2	3	4	5	6	7
1		3					
2			5			8	
3	4			7			
4		6					
5							
6							
7							

6
5 + ____
4 + ____
3 + ____
2 + ____
1 + ____

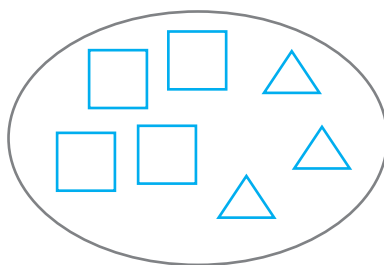
7
6 + ____
5 + ____
4 + ____
3 + ____
2 + ____
1 + ____

8
7 + ____
6 + ____
5 + ____
4 + ____
3 + ____
2 + ____
1 + ____

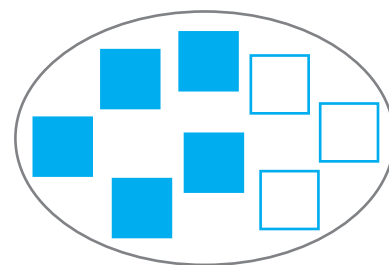
• Observar as figuras. Completar.



___ + ___ = ___



___ + ___ = ___



___ + ___ = ___

• Efectuar contagens e completar.



___ + ___ + ___ = ___



___ + ___ + ___ = ___



___ + ___ + ___ = ___

• Completar (praticar o cálculo mental).

3 + ___ = 4 2 + ___ = 8 2 + ___ = 5 1 + ___ = 6

2 + ___ = 7 5 + ___ = 6 1 + ___ = 3 5 + ___ = 8