






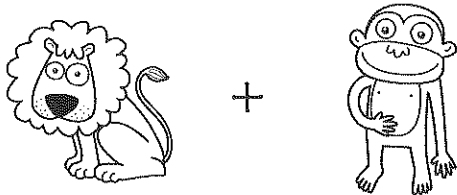
Os animais do jardim zoológico

- Na tabela seguinte está registado o número de animais que existe num jardim zoológico.

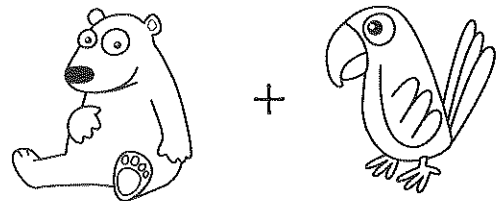
$$X = 5$$

				
XXXX	XX	XXX	XXX	X

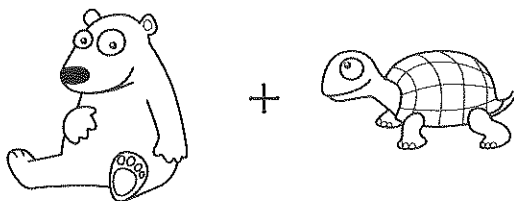
- Calcula o total em cada situação.



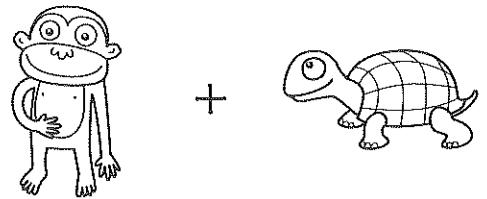
$$20 + \underline{\quad\quad} = \underline{\quad\quad}$$



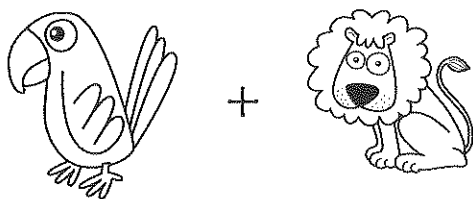
$$\underline{\quad\quad} + \underline{\quad\quad} = \underline{\quad\quad}$$




$$\underline{\quad\quad} + \underline{\quad\quad} = \underline{\quad\quad}$$



$$\underline{\quad\quad} + \underline{\quad\quad} = \underline{\quad\quad}$$



$$\underline{\quad\quad} + \underline{\quad\quad} = \underline{\quad\quad}$$



$$\underline{\quad\quad} + \underline{\quad\quad} = \underline{\quad\quad}$$