
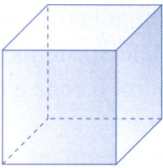


Nomes e elementos dos sólidos

Identifica os sólidos representados em perspectiva.

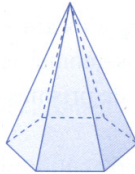
Regista os seus nomes no teu caderno e completa a tabela no teu caderno.



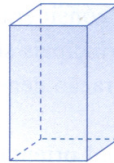
A



B



C



D



E

Sólido	Número de faces	Número de arestas	Número de vértices