


Composição e decomposição do dezassete (17)

- Formar grupos de 10. Completar e registar.



17

d	u
	.
dezassete	

10 + ____

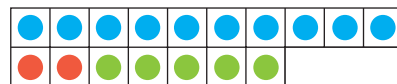
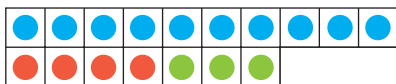
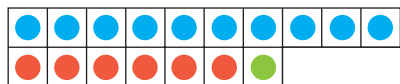
dezassete

- Completar de acordo com as cores.

16 + 1 = 17

14 + 3 = 17

12 + 5 = 17



10 + 6 + ____ = 17

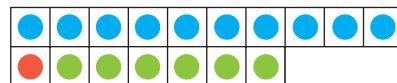
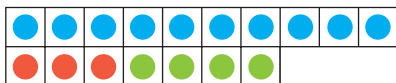
10 + ____ + ____ = 17

10 + ____ + ____ = 17

15 + 2 = 17

13 + 4 = 17

11 + 6 = 17




10 + ____ + ____ = 17

10 + ____ + ____ = 17

10 + ____ + ____ = 17

- Ler e completar.

São 17 andorinhas.
Algumas voam, outras estão
pousadas.



8 + 2 + 7 = 17

Quantas andorinhas voam em
cada situação?

4 + 6 + ____ = 17

7 + 3 + ____ = 17

5 + ____ + 7 = 17

1 + ____ + 7 = 17

2 + 5 + ____ = 17