

x



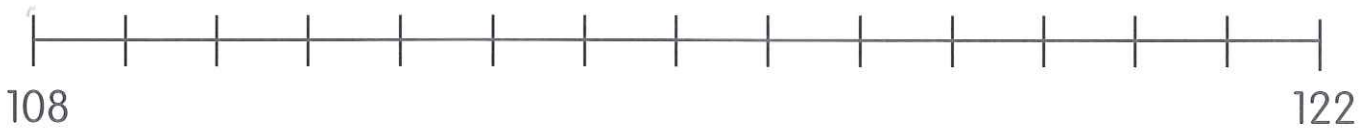
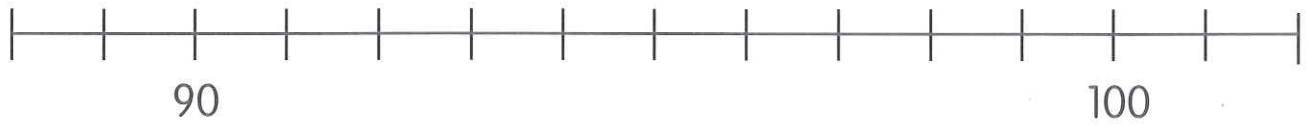

6



:



• Completa as rectas numéricas.



• Completa a sequência, de 10 em 10.



x



7

6



:



# Rectas numéricas =

- Rodeia e coloca o valor correspondente ao algoritmo. Vê com atenção os saltos na recta numérica. Observa o exemplo:

