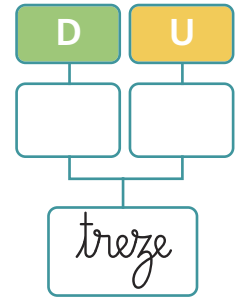
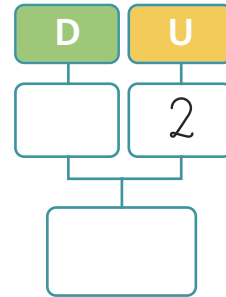
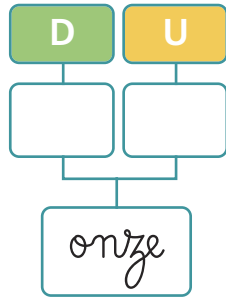
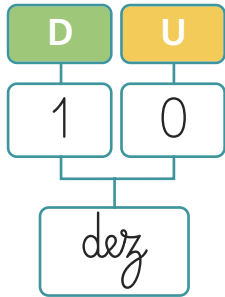


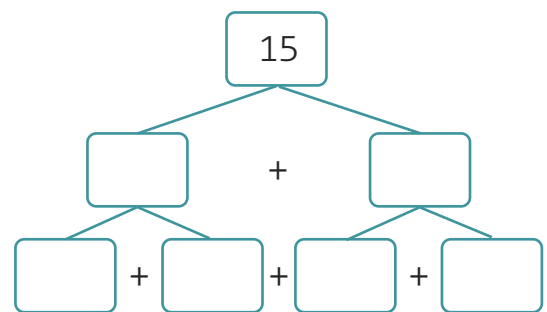
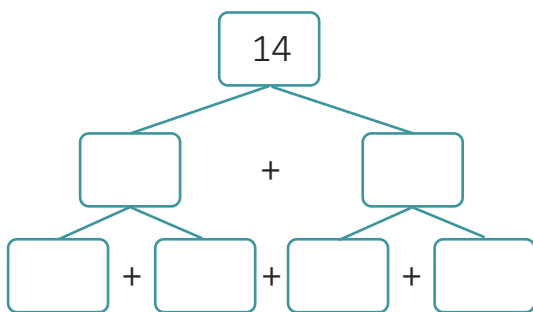
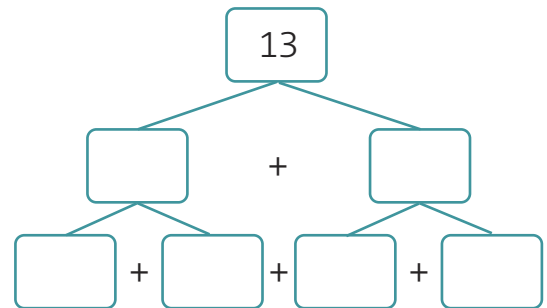
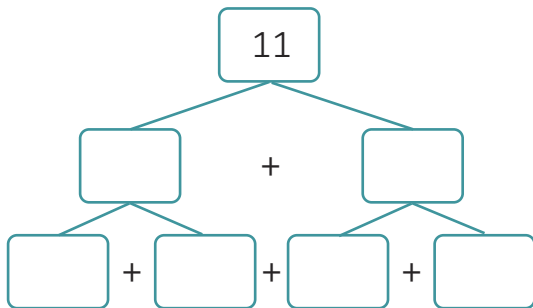
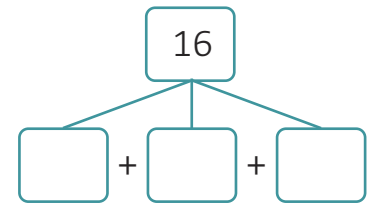
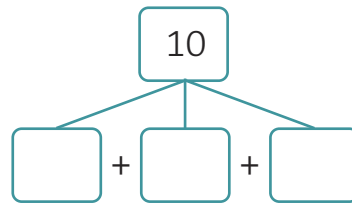
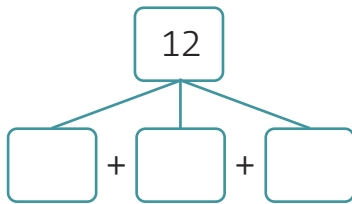
Nome: \_\_\_\_\_

Data: \_\_\_\_\_

1. Observa os quadros e completa.



2. Decompõe.



3. Efectua.

$8 + 4 = \square$

$7 + \square = 16$

$\square + 3 = 14$

$13 - \square = 12$

$10 + 2 = \square$

$6 + \square = 12$

$\square + 1 = 16$

$\square - 1 = 15$

4. O ramo mais baixo de uma árvore tinha 16 folhas.  
Durante a manhã de um dia muito ventoso caíram 8 folhas.  
Nesse dia, à tarde, caíram 4 folhas.  
Com quantas folhas ficou o ramo ao fim da manhã?



Resposta: \_\_\_\_\_

- Quantas folhas caíram durante esse dia?

Resposta: \_\_\_\_\_

- Quantas folhas ficaram no ramo no final do dia?

Resposta: \_\_\_\_\_

- Caíram mais folhas durante a manhã ou durante a tarde? Quantas mais?

Resposta: \_\_\_\_\_