

Nome: \_\_\_\_\_

Data: \_\_\_\_\_

1. Cobre e completa.

|   |   |   |   |   |   |   |   |   |   |   |   |   |   |   |   |   |
|---|---|---|---|---|---|---|---|---|---|---|---|---|---|---|---|---|
| 4 | 4 | 4 | 4 | 4 | 4 | 4 | 4 | 4 | 4 | 4 | 4 | 4 | 4 | 4 | 4 | 4 |
| 4 | 4 |   |   |   |   |   |   |   |   |   |   |   |   |   |   |   |


2. Pinta 4 contas no colar de contas.





3. Forma grupos de 4 balões.



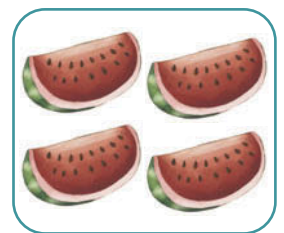
4. Escreve o número ou desenha o número de elementos representados em cada grupo.



4



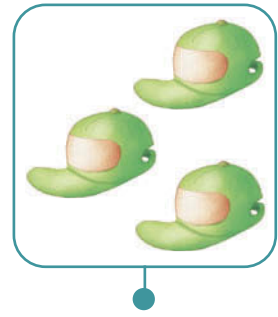

4



5. Completa a sequência.

|   |    |     |      |   |    |     |      |  |  |  |  |  |  |  |  |  |
|---|----|-----|------|---|----|-----|------|--|--|--|--|--|--|--|--|--|
| • | •• | ••• | •••• | • | •• | ••• | •••• |  |  |  |  |  |  |  |  |  |
| 1 | 2  | 3   | 4    | 1 |    |     |      |  |  |  |  |  |  |  |  |  |

6. Liga cada grupo ao número e ao cartão correspondente ao número de elementos.



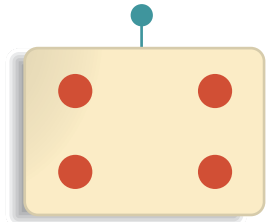
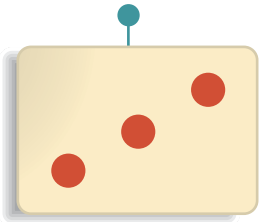


1


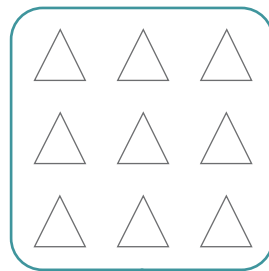


2

3

4



7. Pinta a quantidade indicada.



3

2

4

1

8. Descobre o padrão e completa-o.



9. Completa a sequência numérica.

