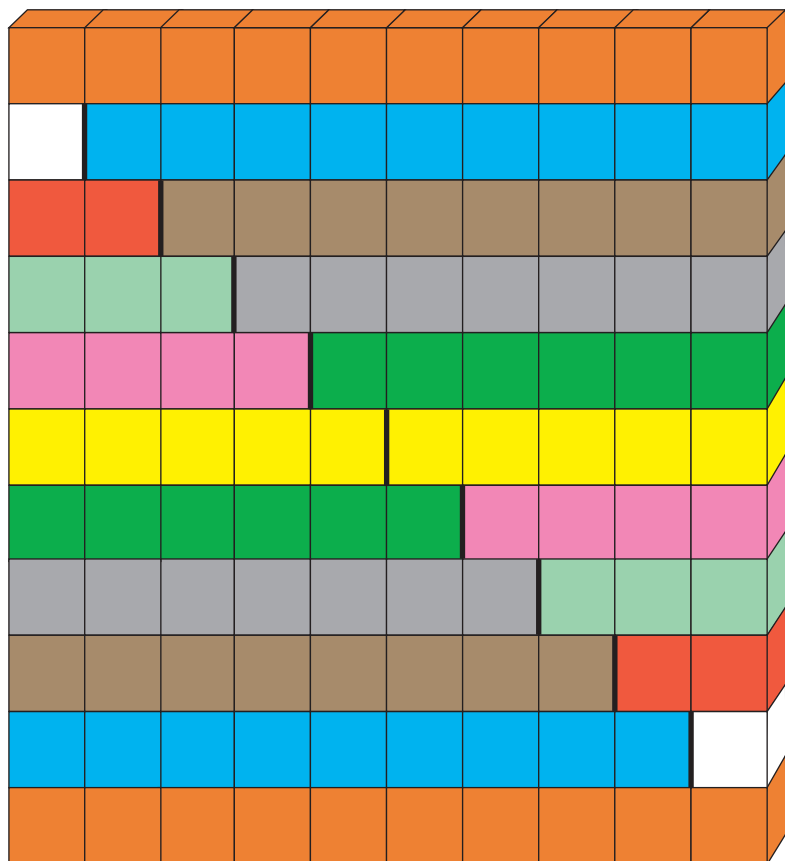


6

O número dez (10)

- Conversar sobre os exercícios propostos.
- Completar de acordo com as cores das barras.



$$0 + 10 = 10$$

$$1 + \underline{\quad} = 10$$

$$2 + \underline{\quad} = 10$$

$$3 + \underline{\quad} = 10$$

$$4 + \underline{\quad} = 10$$

$$5 + \underline{\quad} = 10$$

$$6 + \underline{\quad} = 10$$


$$7 + \underline{\quad} = 10$$

$$8 + \underline{\quad} = 10$$

$$9 + \underline{\quad} = 10$$


$$10 + \underline{\quad} = 10$$

- Completar de acordo com a cor das flores (a soma é sempre dez).




$$10 + 0$$

$$0 + 10$$




$$1 + \underline{\quad}$$

$$9 + \underline{\quad}$$




$$2 + \underline{\quad}$$

$$8 + \underline{\quad}$$




$$\underline{\quad} + 3$$

$$\underline{\quad} + \underline{\quad}$$



$$6 + \underline{\quad}$$

$$\underline{\quad} + \underline{\quad}$$



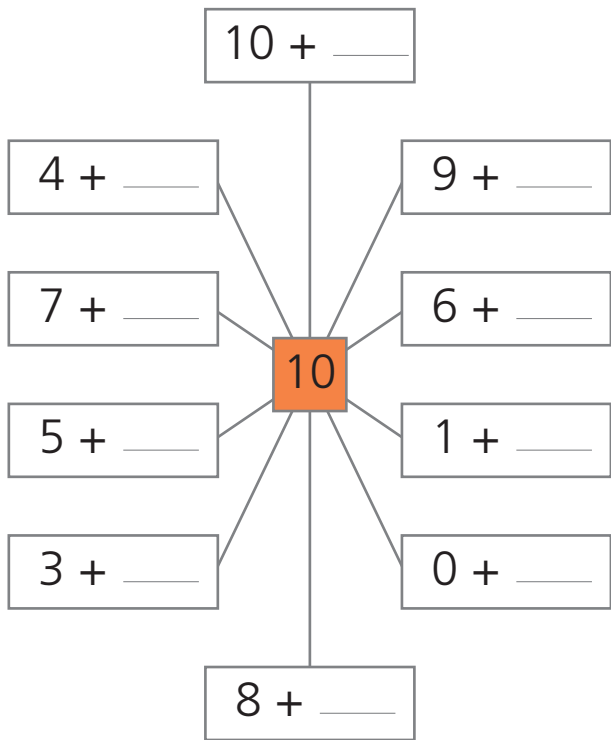
$$5 + \underline{\quad}$$

$$\underline{\quad} + \underline{\quad}$$

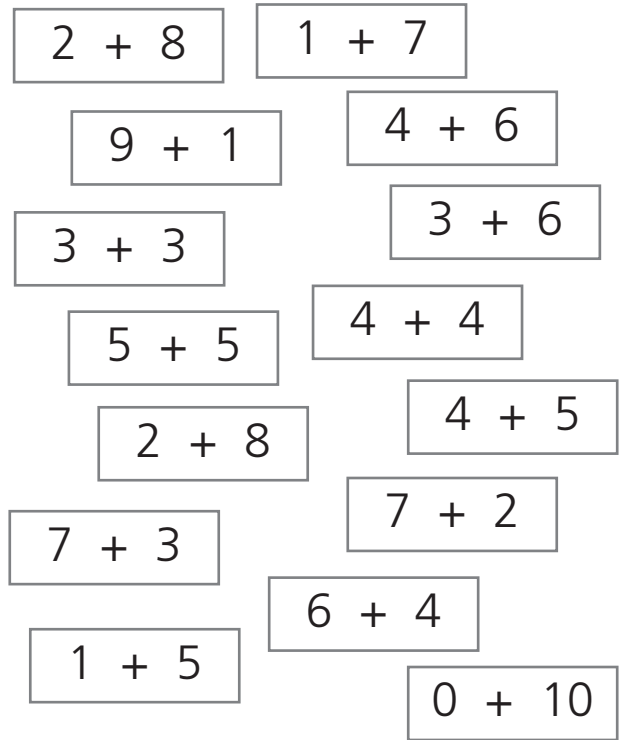
Composição e decomposição de números



- Conversar sobre os exercícios propostos.
- Completar as etiquetas de modo a que a soma seja dez.



- Colorir as etiquetas onde a soma é dez.



- Colocar os números que faltam nas rectas graduadas (ordem crescente e decrescente).



- Completar conforme a indicação das setas.

