

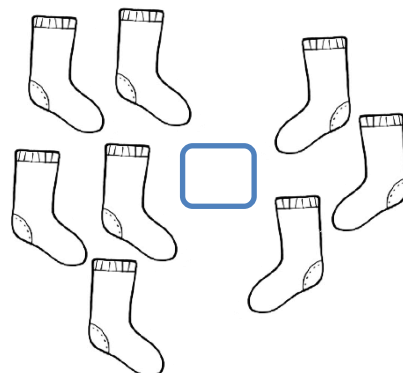

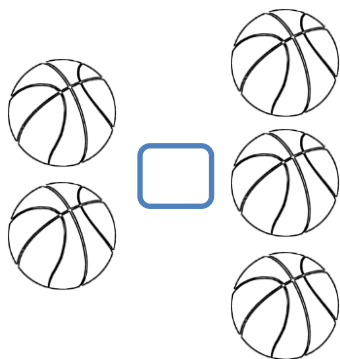
MATEMÁTICA

Nome : _____

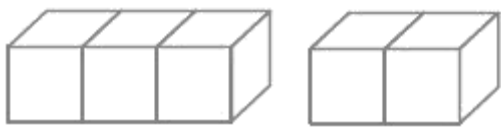
Data : ___/___/___



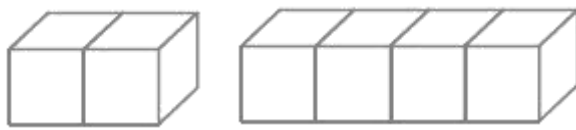
Completa com os sinais $>$, $<$ ou $=$.



Coloca os números.



_____ $>$ _____



_____ $>$ _____



Pinta os algarismos que representam:

- a maior quantidade.
- a menor quantidade.
- as quantidades iguais.



Completa com os sinais $>$, $<$ ou $=$.

3 4

2 2

5 2

1 5

3 1

4 4