






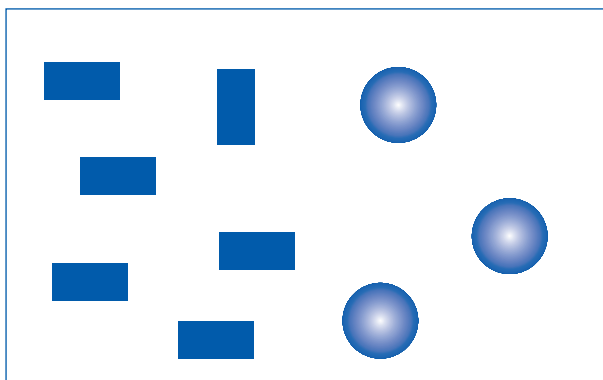
● Observar e completar.



$>$     $=$     $<$   
 5  
 4  
 5  $>$  4






 \_\_\_\_\_  
 \_\_\_\_\_  
 \_\_\_\_\_ + \_\_\_\_\_ = \_\_\_\_\_



 \_\_\_\_\_  
 \_\_\_\_\_  
 \_\_\_\_\_  $<$  \_\_\_\_\_





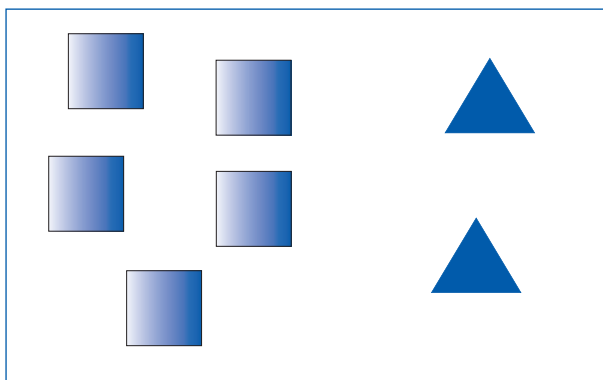
 \_\_\_\_\_  
 \_\_\_\_\_  
 \_\_\_\_\_ + \_\_\_\_\_ = \_\_\_\_\_



 \_\_\_\_\_  
 \_\_\_\_\_  
 \_\_\_\_\_  \_\_\_\_\_



 \_\_\_\_\_  
 \_\_\_\_\_  
 \_\_\_\_\_ + \_\_\_\_\_ = \_\_\_\_\_

 \_\_\_\_\_  
 \_\_\_\_\_  
 \_\_\_\_\_  \_\_\_\_\_



 \_\_\_\_\_  
 \_\_\_\_\_  
 \_\_\_\_\_ + \_\_\_\_\_ = \_\_\_\_\_