

Nome: \_\_\_\_\_

Data: \_\_\_\_\_


1. Cobre e completa.

8	8	8	8	8	8	8	8	8	8	8	8	8	8	8	8	8
8	8															

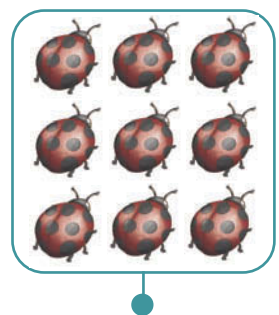
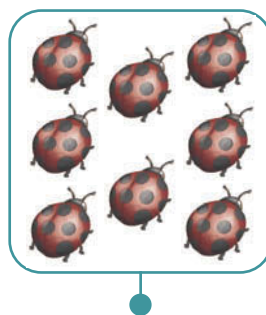
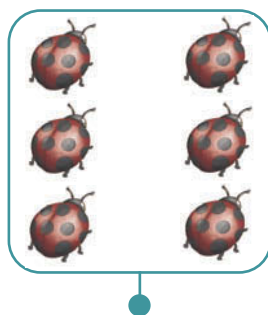
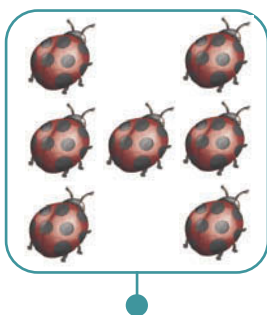
2. Cobre e completa.

9	9	9	9	9	9	9	9	9	9	9	9	9	9	9	9	9
9	9															

3. Forma um grupo de 8 elementos.



4. Liga com um traço cada conjunto à etiqueta correspondente.



9

6

7

8

5. Decompõe as quantidades **8** e **9**. Para isso, desenha os pontos que faltam e completa.

8

$7 + 1$

$6 +$

9

$8 + 1$


6. Resolve.

A Carochinha tinha 9 morangos e comeu 3.  
Com quantos morangos ficou?

**Dados:**

Morangos que tinha

Morangos que comeu



Resposta: Ficou com  morangos.