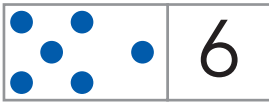
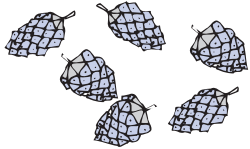




4 Os números seis (6) e sete (7)

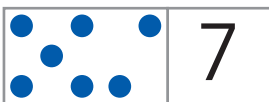
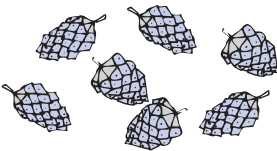
- Contar as pinhas que estão no chão junto do pinheiro. Circundar conjuntos de seis pinhas. Pintar, de verde-escuro, a barra do seis. Escrever 6.



seis



- Contar as pinhas que estão no chão, junto do pinheiro. Circundar conjuntos de sete pinhas. Pintar, de cinzento, a barra do sete. Escrever 7.



sete

