


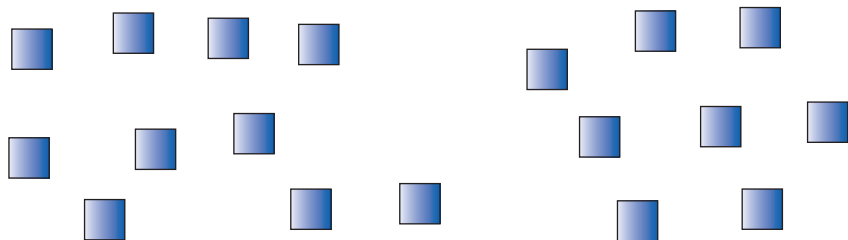
# 6 Os números até vinte (20)

● Formar grupos de dez, em cada situação indicada. Registrar, nas tabelas, o número de agrupamentos e o dos elementos que sobram.



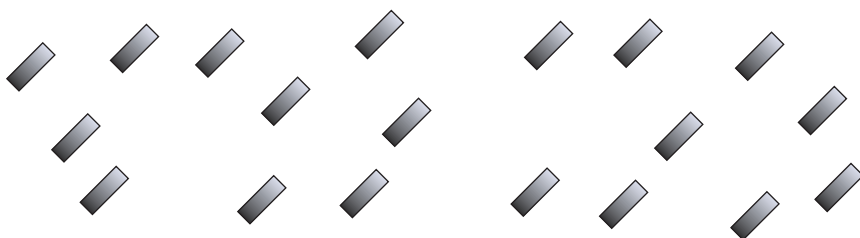
1	
dezasete	

10 + \_\_\_ = \_\_\_



1	
dezoito	

10 + \_\_\_ = \_\_\_




1	
dezanove	

10 + \_\_\_ = \_\_\_



1	
dez	

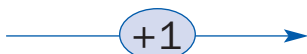
10 + \_\_\_ = \_\_\_



2	0
vinte	

10 + \_\_\_ = \_\_\_

● Completar.



1				5				10	11							20
---	--	--	--	---	--	--	--	----	----	--	--	--	--	--	--	----