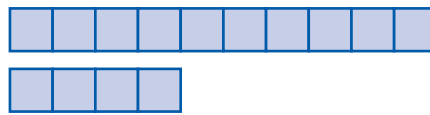


Composição e decomposição de números (13 e 14) 7

● Observar e completar.



d	u
1	3
treze	



d	u
1	4
catorze	

$$10 + \underline{\quad} = \underline{\quad}$$

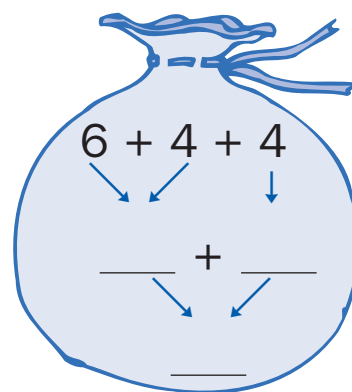
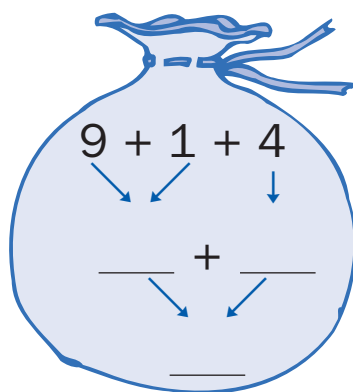
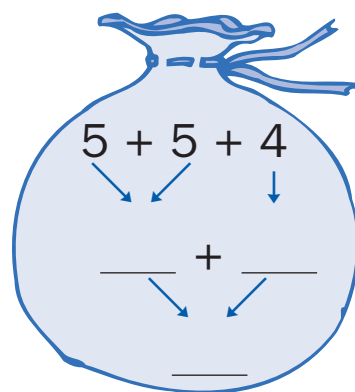
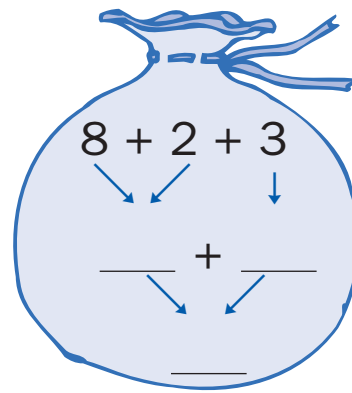
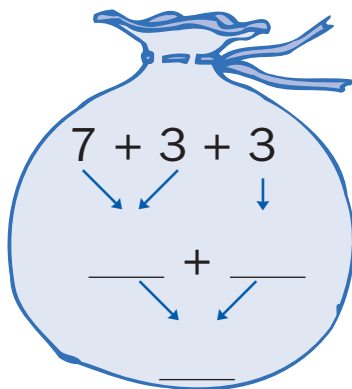
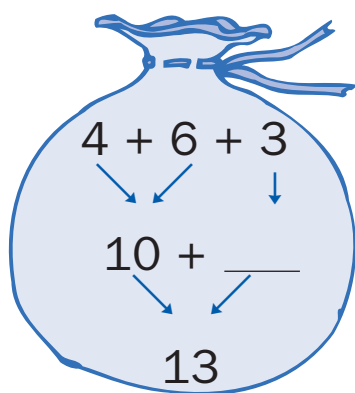
$$10 + \underline{\quad} = \underline{\quad}$$

$$13 = 10 + \underline{\quad}$$

$$14 = \underline{\quad} + \underline{\quad}$$

1 dezena e 3 unidades
ou 13 unidades

1 dezena e unidades
ou unidades



● Continuar o ritmo.

