

Nome: _____ Data: _____

1. Completa as séries.

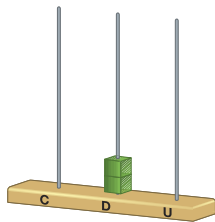
17 $\xrightarrow{-2}$ $\xrightarrow{-3}$ $\xrightarrow{+1}$ $\xrightarrow{+2}$ $\xrightarrow{+3}$

18 $\xrightarrow{-2}$ $\xrightarrow{-6}$ $\xrightarrow{+4}$ $\xrightarrow{-6}$ $\xrightarrow{+8}$

19 $\xrightarrow{-3}$ $\xrightarrow{-2}$ $\xrightarrow{+4}$ $\xrightarrow{-7}$ $\xrightarrow{+3}$

2. Observa e resolve.

20 unidades \rightarrow 2 D



D	U
2	0


$10 + 10 = \square$

$15 + 5 = \square$

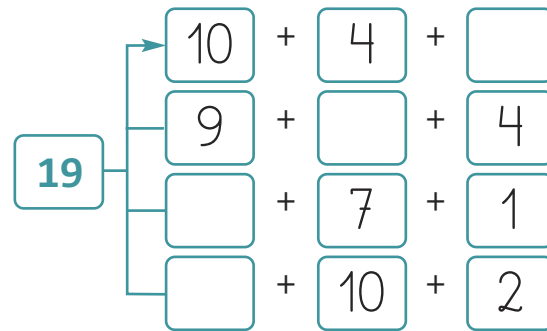
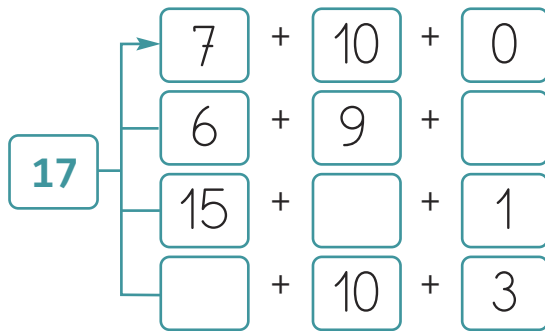
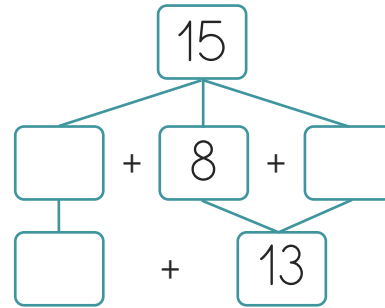
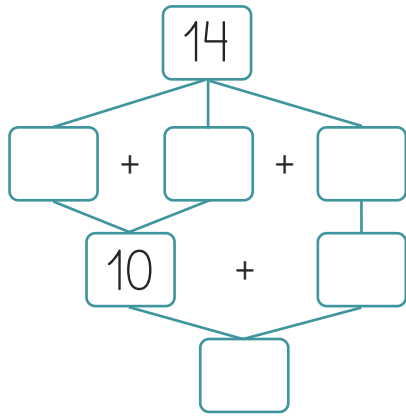
3. Conta os gorros e completa.

+ =

4. Escreve os números de 1 a 20.



5. Decompõe os números.



6. Completa o quadro.

16	10 + ____	_____ dezena e _____ unidades
17	10 + ____	_____ dezena e _____ unidades
18	10 + ____	_____ dezena e _____ unidades
19	10 + ____	_____ dezena e _____ unidades

7. Em casa do Carlos gasta-se muita água, por isso, ele comprou as embalagens de água representadas na figura. Quantas garrafas de água comprou?



Resposta: _____

- Ao fim de 4 dias já tinham consumido 8 garrafas de água. Quantas garrafas de água ainda têm?

Resposta: _____