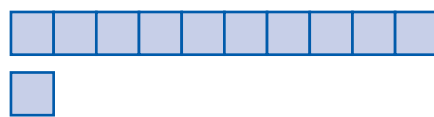


6 Composição e decomposição de números (11 e 12)

- Observar e completar.

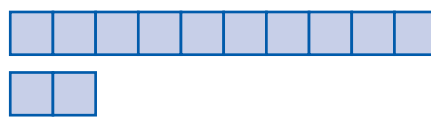


d	u
1	1
onze	

$10 + 1 = \underline{\quad}$

$11 = 10 + \underline{\quad}$

1 dezena e 1 unidade



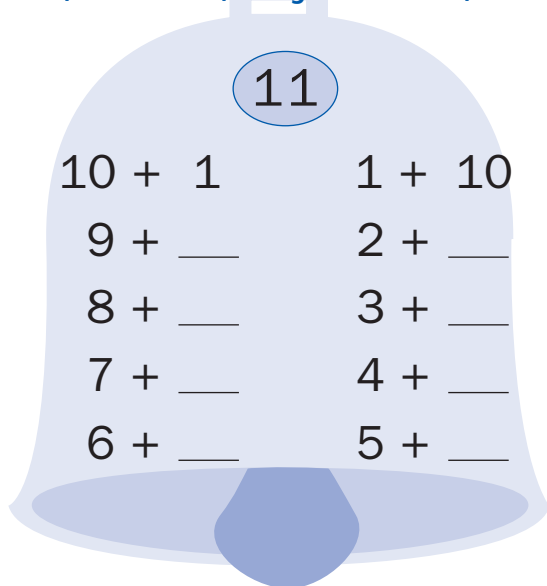
d	u
1	2
doze	

$10 + 2 = \underline{\quad}$

$12 = 10 + \underline{\quad}$

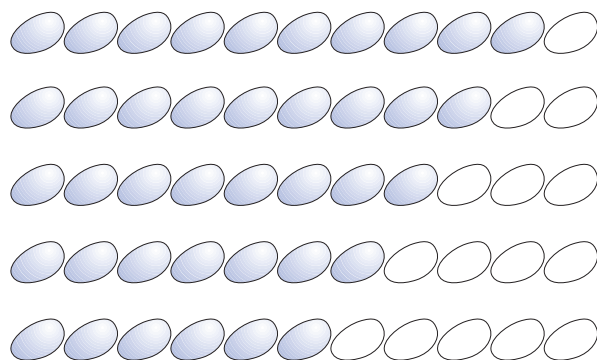
1 dezena e unidades

- Completar a decomposição do 11.
- Pintar, de amarelo, as figuras sem cor, de acordo com a decomposição.

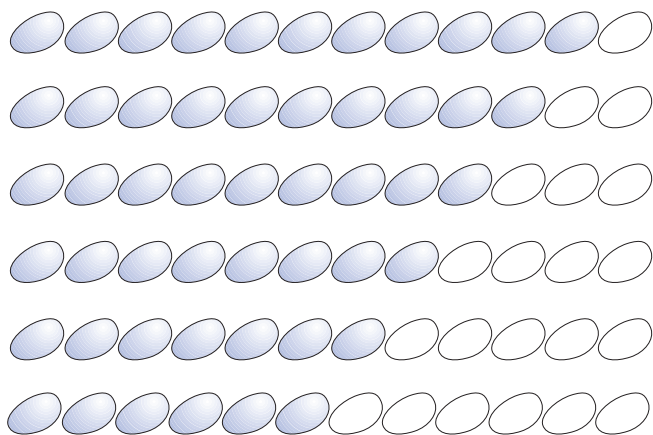
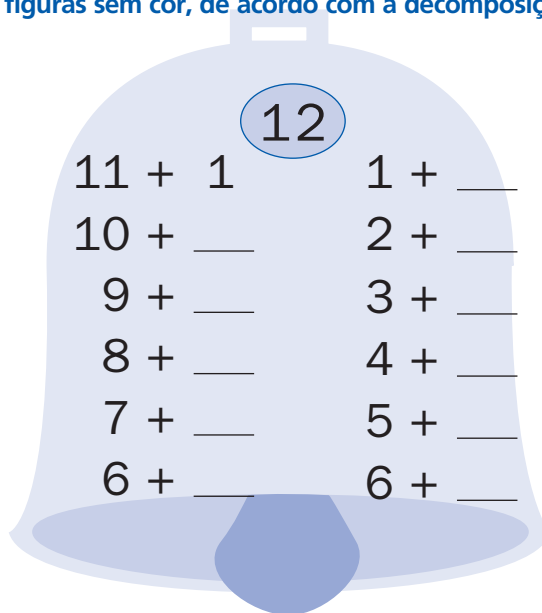


11

10 + 1	1 + 10
9 + <u> </u>	2 + <u> </u>
8 + <u> </u>	3 + <u> </u>
7 + <u> </u>	4 + <u> </u>
6 + <u> </u>	5 + <u> </u>



- Completar a decomposição do 12. Pintar, de vermelho, as figuras sem cor, de acordo com a decomposição.

12

11 + 1	1 + <u> </u>
10 + <u> </u>	2 + <u> </u>
9 + <u> </u>	3 + <u> </u>
8 + <u> </u>	4 + <u> </u>
7 + <u> </u>	5 + <u> </u>
6 + <u> </u>	6 + <u> </u>