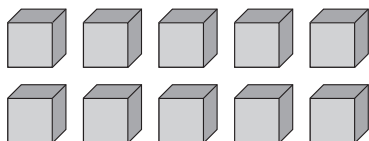


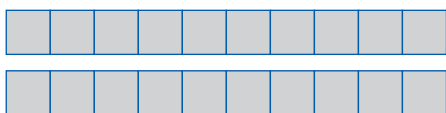
A dezena

- Contar o número de cubos. Observar, na tabela, o registo de um agrupamento de dez (uma dezena). Ler e completar.



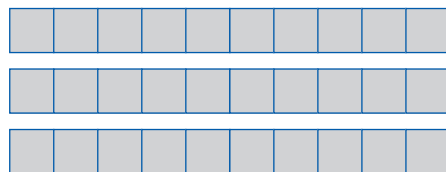
| dezenas | unidades |
|---------|----------|
| | |
| 1 | 0 |

Um grupo de 10 é uma **dezena**.



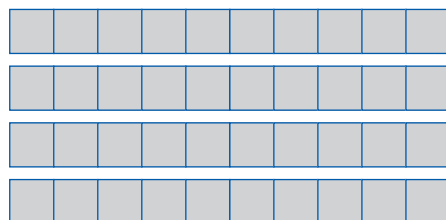
$$10 + 10 = 20$$

| dezenas | unidades |
|--------------|----------|
| | |
| 2 | 0 |
| <i>vinte</i> | |




$$10 + 10 + _ = 30$$

| dezenas | unidades |
|---------------|----------|
| | |
| 3 | 0 |
| <i>trinta</i> | |



$$10 + _ + _ + _ = 40$$

| dezenas | unidades |
|-----------------|----------|
| | |
| 4 | 0 |
| <i>quarenta</i> | |



$$10 + _ + _ + _ + _ = 50$$

| dezenas | unidades |
|------------------|----------|
| | |
| 5 | 0 |
| <i>cinquenta</i> | |