

Já sei. 😊

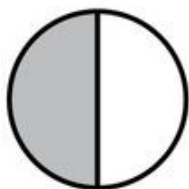
Tenho que praticar. 😐

Ainda não sei. 😞


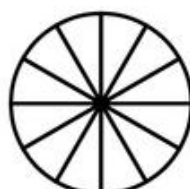
Nome: _____ Data: ____/____/____

Compara as frações.

Pinta e compara as frações com os sinais de $>$, $<$ e $=$.



$$\frac{1}{2} > \frac{1}{3}$$




$$\frac{4}{12} \square \frac{2}{4}$$




$$\frac{3}{4} \square \frac{2}{3}$$



$$\frac{6}{12} \square \frac{3}{8}$$



$$\frac{1}{2} \square \frac{3}{4}$$



$$\frac{2}{4} \square \frac{2}{5}$$