

Horas

- Completa.

1 h _____ min

$\frac{1}{2}\text{ h}$ _____ min


$1\text{ h} + \frac{1}{2}\text{ h}$ _____ min

2 h _____ min


$2\text{ h} + \frac{1}{2}\text{ h}$ _____ min

3 h _____ min


- Escreve a hora marcada em cada relógio.




_____ h _____ min



_____ h _____ min



_____ h _____ min



_____ h _____ min