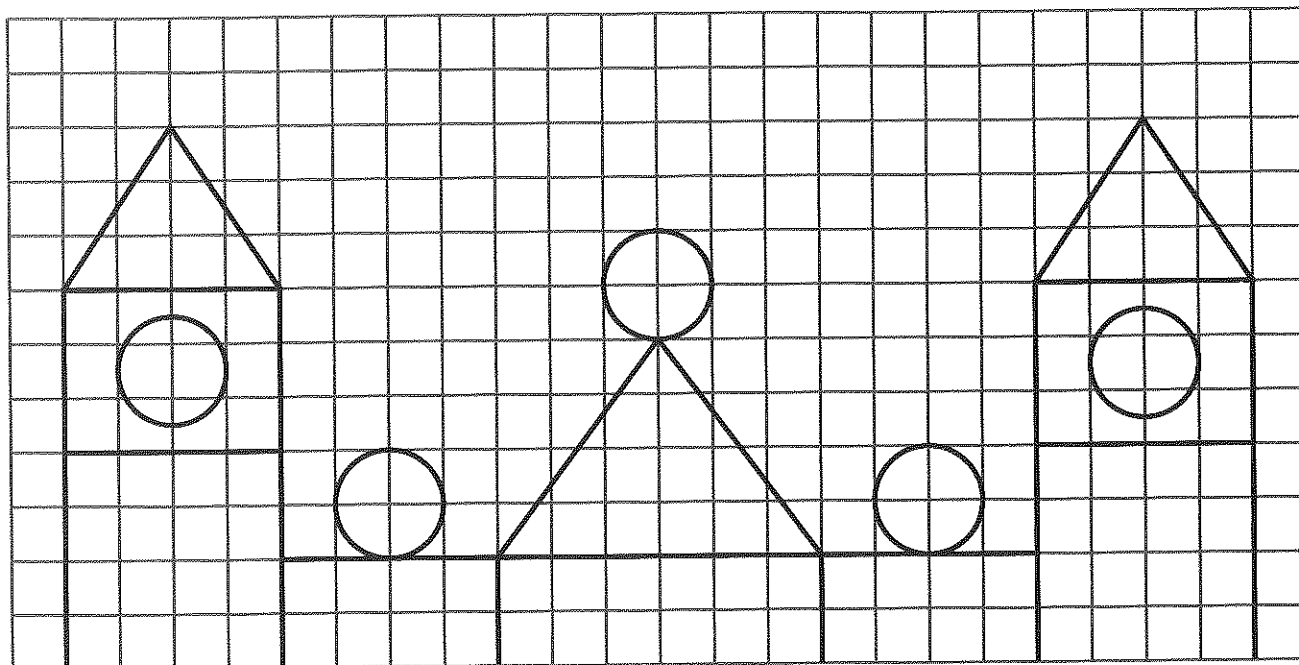

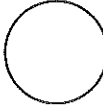




## Figuras geométricas planas

- Observa a figura. Completa a tabela com o número respectivo de figuras que consegues contar.



Figuras geométricas				
Número de figuras				

- Observa o exemplo. Decompõe os números.

$$25 = 10 + 10 + 5$$

$$28 = \underline{\quad} + \underline{\quad} + \underline{\quad}$$

$$33 = \underline{\quad} + \underline{\quad} + \underline{\quad} + \underline{\quad}$$

$$46 = \underline{\quad} + \underline{\quad} + \underline{\quad} + \underline{\quad} + \underline{\quad}$$