


# Volume

- Observa as construções representadas e completa a tabela com o volume de cada uma.

 = unidade de medida do volume

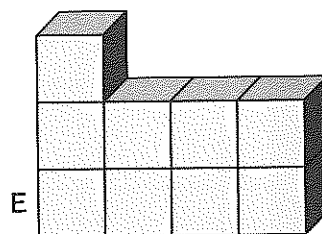
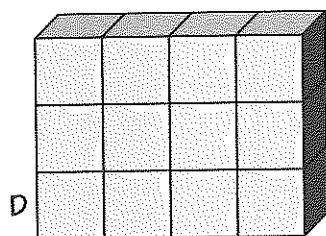
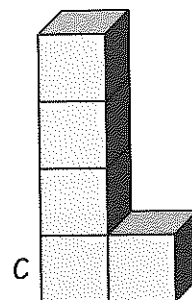
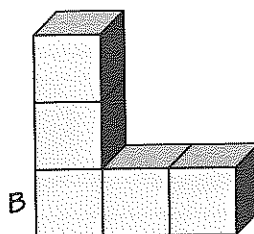
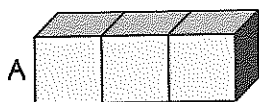







figura	volume
A	
B	
C	
D	
E	

- Calcula e completa.

$270 + 150 = \dots$

$544 - 24 = \dots$

$299 - 111 = \dots$

$350 + 350 = \dots$

$75 - 15 = \dots$

$922 + 127 = \dots$

$320 + 25 = \dots$

$777 - 707 = \dots$

$986 - 106 = \dots$

$675 + 22 = \dots$

$875 - 15 = \dots$

$727 + 120 = \dots$