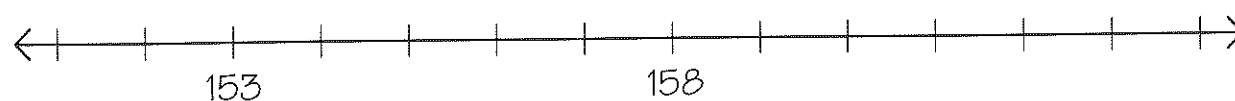

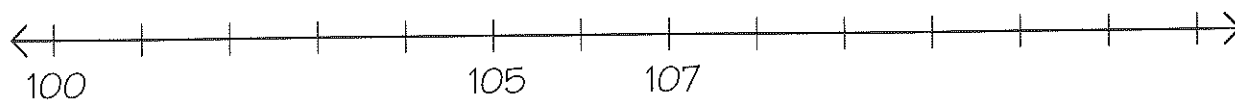


Números de 100 a 199

- Completa as rectas numéricas com os números que faltam.



- Escreve em português os números seguintes.

110

113

124

136

148

157

161

172

185

199
