

6 ficha de extensão

● Completar de acordo com os resultados indicados.

	10	11	12
$6 + 4 + \underline{\quad}$			X
$8 + 1 + \underline{\quad}$		X	
$5 + 1 + \underline{\quad}$	X		
$9 + 2 + \underline{\quad}$			X
$4 + 5 + \underline{\quad}$		X	
$3 + 3 + \underline{\quad}$	X		

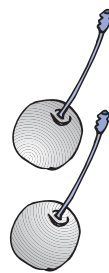
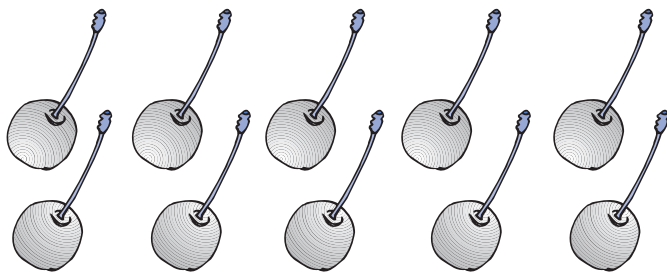
$12 - \underline{\quad}$ ↗ 9

$11 - \underline{\quad}$ ↗ 10

$7 + 2 + \underline{\quad}$ ↘ 11

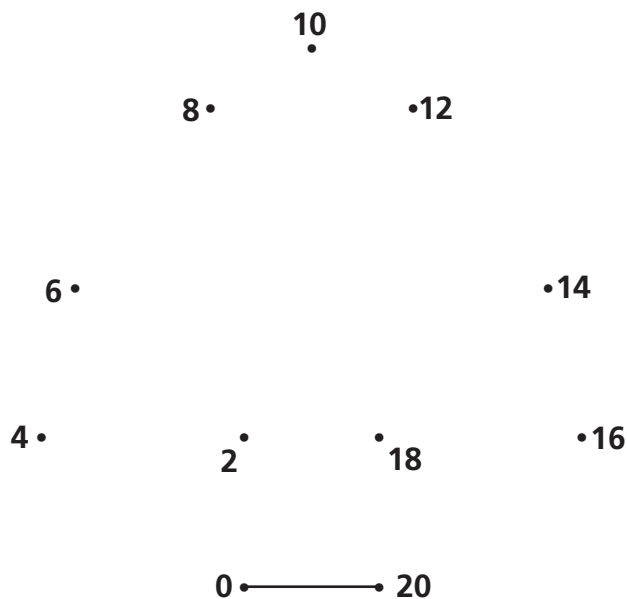
$3 + 2 + \underline{\quad}$ ↘ 12

● Formar grupos de dez. Registrar na tabela.


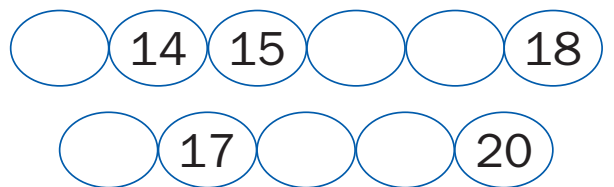


d	u
●●●●●	●

● Ligar de 2 em 2. Pintar a figura.



● Escrever os números que faltam em cada série.



$5 + 2 + 4$	<input type="text"/>	$6 + 2 + 3$
$12 - 4$	<input type="text"/>	$6 + 4$
$6 + 3$	<input type="text"/>	$7 + 2 + 3$