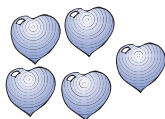
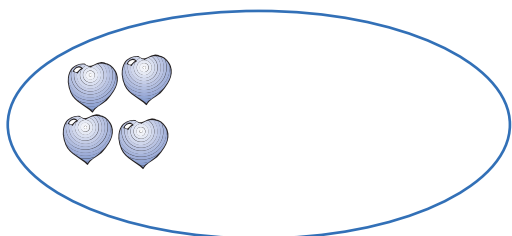


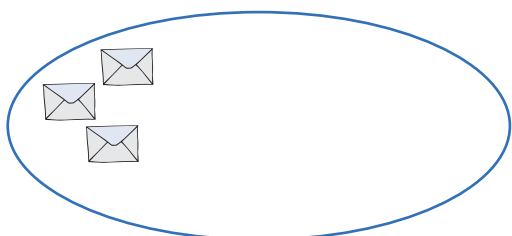
A dezena

● Completar os elementos que faltam, de acordo com o registo na tabela.




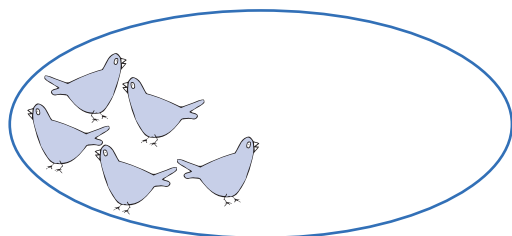
$$10 + 5 = \underline{\quad}$$

d	u
	•
1	5



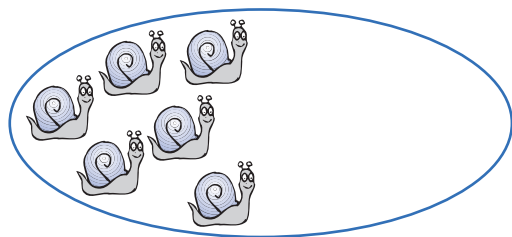
$$10 + 8 = \underline{\quad}$$

d	u
	•
1	8



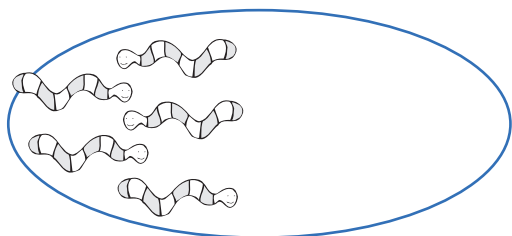
$$10 + 9 = \underline{\quad}$$

d	u
	•
1	9



$$10 + 4 = \underline{\quad}$$

d	u
	•
1	4



$$10 + 10 = \underline{\quad}$$

d	u
	•
2	0