



ficha de sistematização

7


- Calcular e completar. Ligar cada etiqueta ao resultado certo. Verificar os resultados com a ajuda das figuras dos coelhos.




$9 + \underline{\quad}$	$16 - 7$
16	9 7
$7 + \underline{\quad}$	$16 - 9$




$7 + \underline{\quad}$	$15 - 8$
15	7 8
$8 + \underline{\quad}$	$15 - 7$




$8 + \underline{\quad}$	$14 - 6$
14	6 8
$6 + \underline{\quad}$	$14 - \underline{\quad}$



$7 + \underline{\quad}$	$13 - 6$
13	6 7
$6 + \underline{\quad}$	$13 - \underline{\quad}$



$10 + \underline{\quad}$	$12 - 2$
12	10 2
$2 + \underline{\quad}$	$12 - \underline{\quad}$



$3 + \underline{\quad}$	$11 - 8$
11	8 3
$8 + \underline{\quad}$	$11 - \underline{\quad}$

- Observar e completar.

$$2 = 1 + 1$$

$$3 = 2 + \underline{\quad}$$

$$3 = 1 + 2$$

$$\textcircled{1}2 = \textcircled{1}1 + \underline{\quad}$$

$$\textcircled{1}3 = \textcircled{1}2 + \underline{\quad}$$

$$\textcircled{1}3 = \underline{\quad} + 2$$

$$4 = 2 + \underline{\quad}$$

$$5 = 3 + \underline{\quad}$$

$$5 = 2 + \underline{\quad}$$

$$\textcircled{1}4 = \textcircled{1}2 + \underline{\quad}$$

$$\textcircled{1}5 = \textcircled{1}3 + \underline{\quad}$$

$$\textcircled{1}5 = \underline{\quad} + 3$$