


# A subtracção

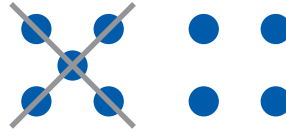
- Observar e completar. (A Contar os elementos de cada conjunto; B riscar os elementos indicados; C escrever as respostas.)

A - Contar



São \_\_\_\_ ●.

B - Riscar

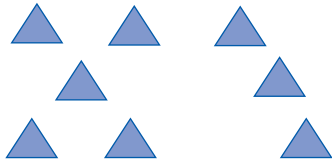


Risco 5 ●.

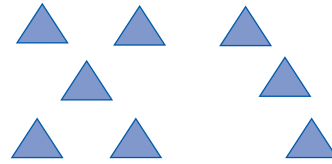
C - Calcular

$$9 - 5 = 4$$

Ficam 4 ●.



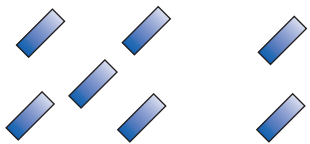
São \_\_\_\_ ▲.




Risco 2 ▲.

$$8 - 2 = \underline{\quad}$$

Ficam \_\_\_\_ ▲.



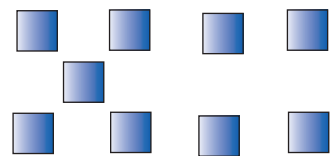
São \_\_\_\_ ✎.



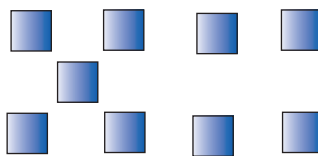
Risco 3 ✎.

$$7 - \underline{\quad} = \underline{\quad}$$

Ficam \_\_\_\_ ✎.




São \_\_\_\_ ■.




Risco 6 ■.

$$\underline{\quad} - \underline{\quad} = \underline{\quad}$$

Ficam \_\_\_\_ ■.



São \_\_\_\_ ✨.



Risco 4 ✨.

$$\underline{\quad} - \underline{\quad} = \underline{\quad}$$

Ficam \_\_\_\_ ✨.