

Nome: \_\_\_\_\_

Data: \_\_\_\_\_


1. Cobre e completa.

1	1	1	1	1	1	1	1	1	1	1	1	1	1	1	1	1
1	1															


2. Pinta 1 conta no colar de contas.

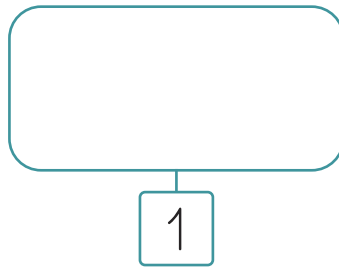


3. Desenha 1 pinta no cartão.




4. Observa e completa.








1




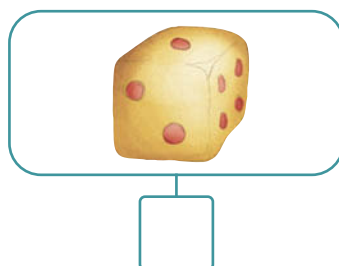

5. Assinala com X os conjuntos que têm 1 elemento.

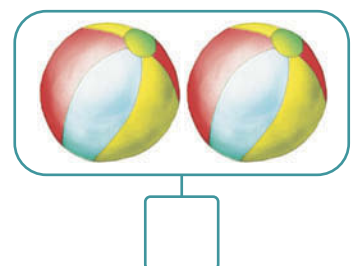













6. Cobre e completa

2	2	2	2	2	2	2	2	2	2	2	2	2	2	2	2	2
2	2															


7. Pinta 2 contas no colar de contas.



8. Desenha 2 pintas no cartão.



9. Liga com um traço cada conjunto ao número de elementos.



1



2

10. Escreve os números representados em cada ábaco.

