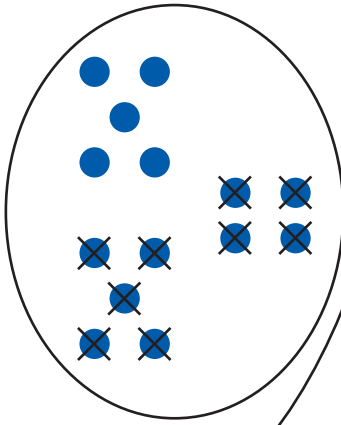





9 Problemas

- Ler os problemas. Ligar cada problema ao seu esquema e à operação certa. Completar as respostas (ver exemplo).

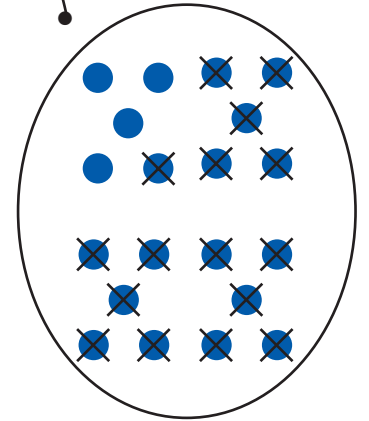


$$20 - 16$$




Eram 20 
 Rebentaram 16 
 Ficaram ____ 




$$14 - 9$$



Eram 14 
 Voaram 9 
 Ficaram ____ 

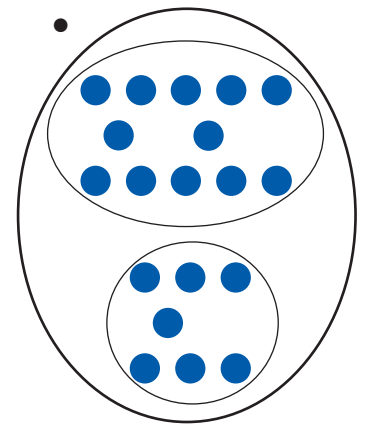


$$15 - 8$$

Tinha 12 
 Ganhou 7 
 Agora tem ____ 

Tinha 15 
 Comeu 8 
 Agora tem ____ 

Tinha 8 
 Deram-lhe 4 e
 depois mais 5.
 Agora tem ____ 



$$8 + 4 + 5$$