
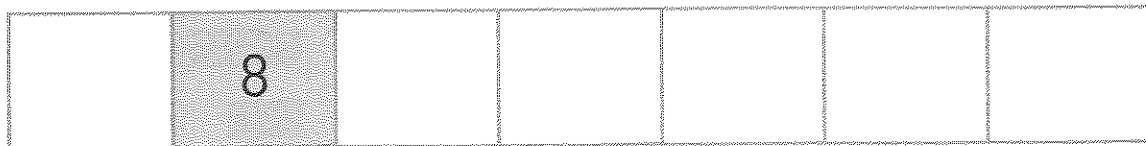
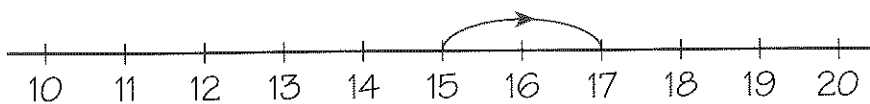


Números de 0 a 20

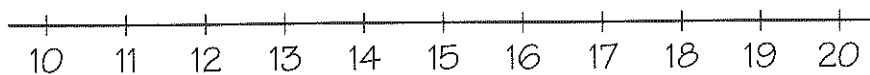
- Completa a série de 0 a 20 com os números que faltam.



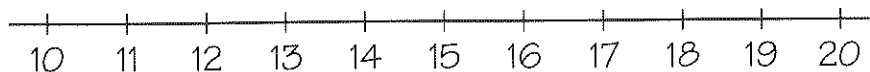
- Calcula e completa com a ajuda da recta. Observa o exemplo.



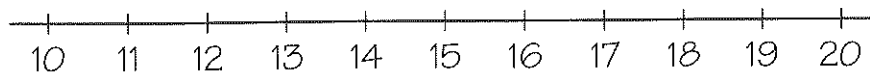
$$15 + 2 = 17$$



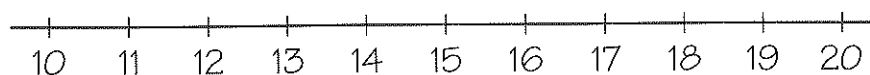
$$12 + 1 = \underline{\quad}$$



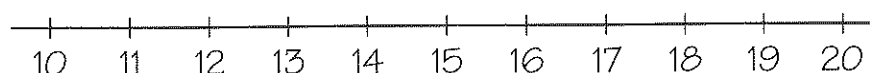
$$17 + 3 = \underline{\quad}$$



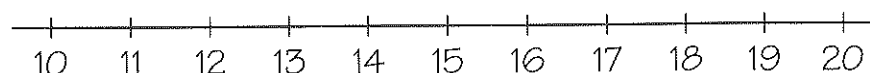
$$18 + 2 = \underline{\quad}$$



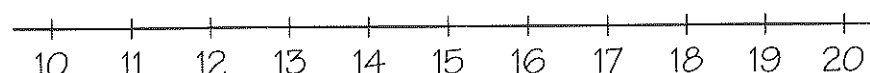
$$13 + 4 = \underline{\quad}$$



$$10 + 2 = \underline{\quad}$$



$$11 + 2 = \underline{\quad}$$



$$16 + 3 = \underline{\quad}$$