

3 Problemas



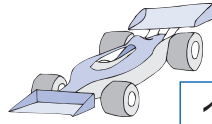
● Completar as etiquetas de acordo com o número de brinquedos que vão em cada caixa.



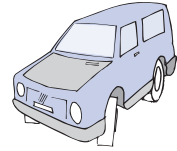
3



2



1



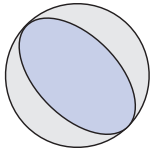
4

$$\square + \square = \square$$

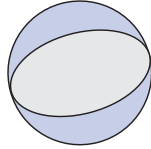
$$\square + \square = \square$$

Vão bonecas.

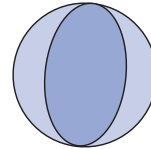
Vão carros.



2



1



2

$$\square + \square + \square = \square$$

Vão bolas.



1



3



1

$$\square + \square + \square = \square$$

Vão casinhas.