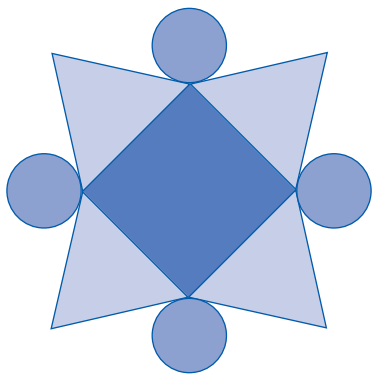



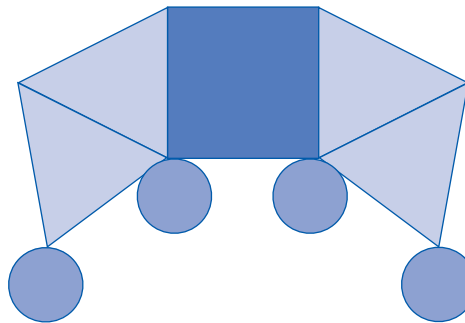
● Observar as composições de figuras geométricas. Escrever o número de figuras de cada composição. Circundar, a vermelho, o conjunto de três composições com o mesmo número de formas iguais; e a verde, o outro conjunto.




○ _____
 □ _____
 △ _____




○ _____
 □ _____
 △ _____



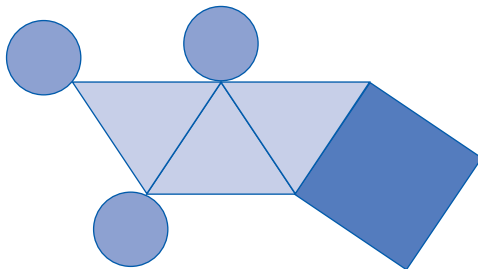
○ _____
 □ _____
 △ _____



○ _____
 □ _____
 △ _____



○ _____
 □ _____
 △ _____



○ _____
 □ _____
 △ _____

● Observar a sequência das figuras ao longo do fio. Completar a sequência dessas figuras.

