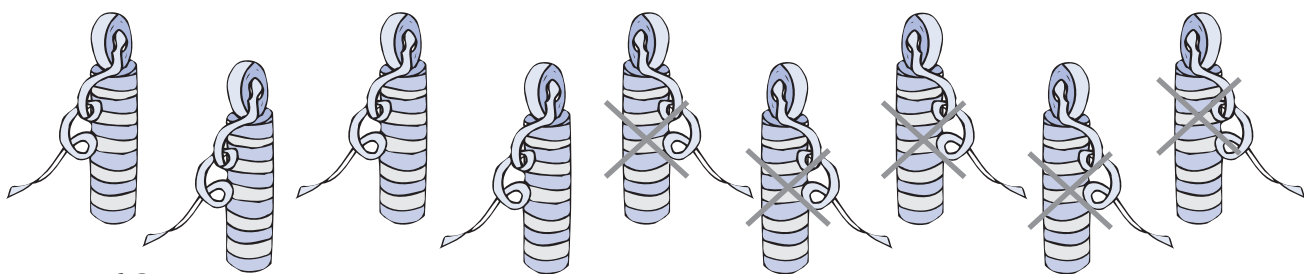


# 5 A subtracção

● Observar e contar os rolos de serpentinas. Completar.




Eram 9

Gastaram 5

Ficaram \_\_\_\_\_

$$9 - 5 = 4$$

● Observar e contar as «nuvens de açúcar». Completar.



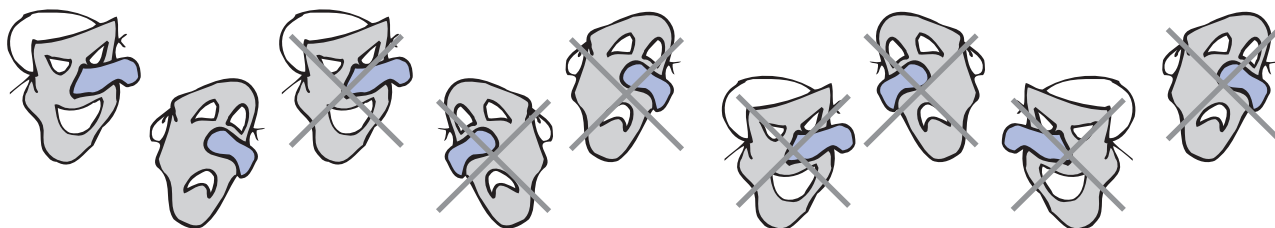
Eram \_\_\_\_\_

Comeram \_\_\_\_\_

Ficaram \_\_\_\_\_

$$8 - 3 = \underline{\quad}$$

● Observar e contar as máscaras de Carnaval. Completar.



Eram \_\_\_\_\_

Venderam \_\_\_\_\_

Ficaram \_\_\_\_\_

$$9 - 7 = \underline{\quad}$$